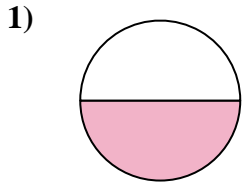


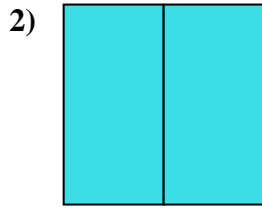


Determine which letter best describes the shaded portion.

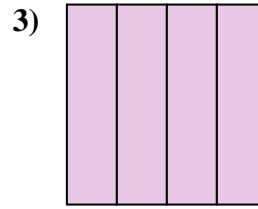
**Answers**



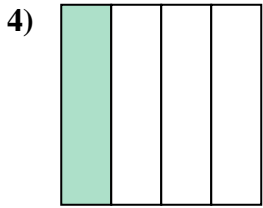
- A. one-half
- B. two-halves
- C. one-fourth



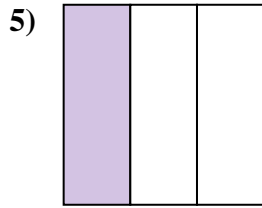
- A. three-fourths
- B. one-quarter
- C. two-halves



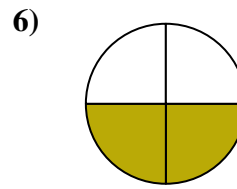
- A. three-fourths
- B. four-quarters
- C. one-fourth



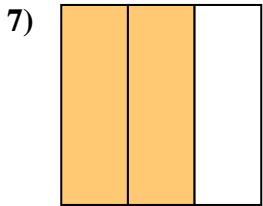
- A. three-fourths
- B. one-fourth
- C. two-halves



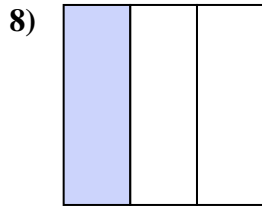
- A. three-quarters
- B. one-third
- C. one-fourth



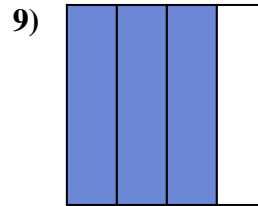
- A. three-fourths
- B. two-fourths
- C. four-fourths



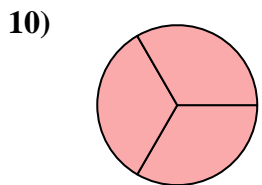
- A. one-quarter
- B. four-quarters
- C. two-thirds



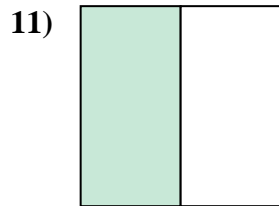
- A. two-halves
- B. one-half
- C. one-third



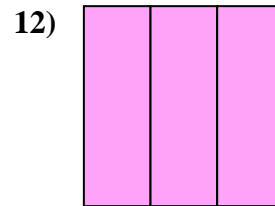
- A. four-fourths
- B. three-fourths
- C. two-quarters



- A. three-thirds
- B. two-halves
- C. four-fourths



- A. one-half
- B. three-fourths
- C. one-fourth

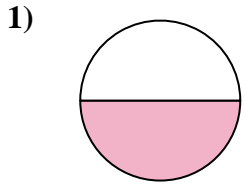


- A. three-thirds
- B. two-halves
- C. one-quarter

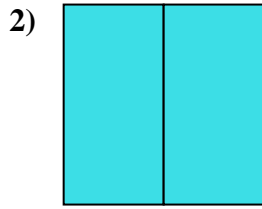
- 1. \_\_\_\_\_
- 2. \_\_\_\_\_
- 3. \_\_\_\_\_
- 4. \_\_\_\_\_
- 5. \_\_\_\_\_
- 6. \_\_\_\_\_
- 7. \_\_\_\_\_
- 8. \_\_\_\_\_
- 9. \_\_\_\_\_
- 10. \_\_\_\_\_
- 11. \_\_\_\_\_
- 12. \_\_\_\_\_



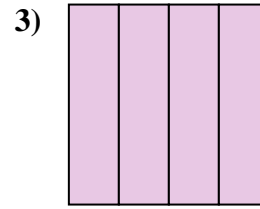
Determine which letter best describes the shaded portion.



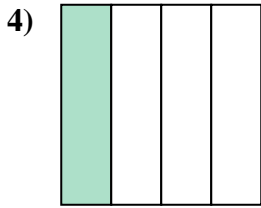
- A. one-half
- B. two-halves
- C. one-fourth



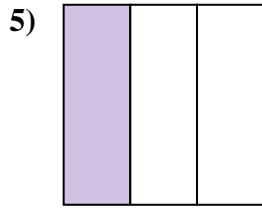
- A. three-fourths
- B. one-quarter
- C. two-halves



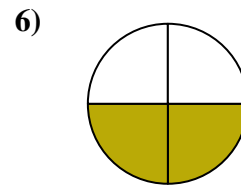
- A. three-fourths
- B. four-quarters
- C. one-fourth



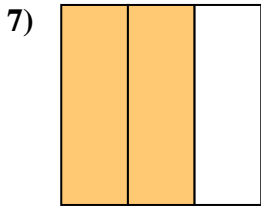
- A. three-fourths
- B. one-fourth
- C. two-halves



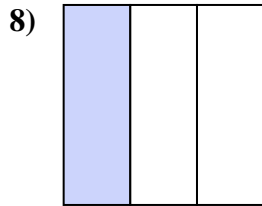
- A. three-quarters
- B. one-third
- C. one-fourth



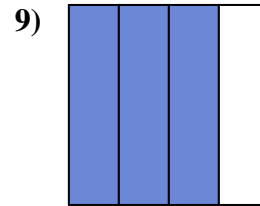
- A. three-fourths
- B. two-fourths
- C. four-fourths



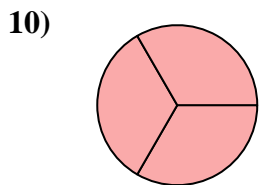
- A. one-quarter
- B. four-quarters
- C. two-thirds



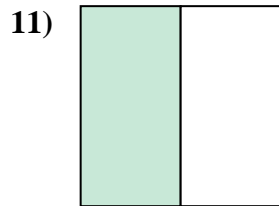
- A. two-halves
- B. one-half
- C. one-third



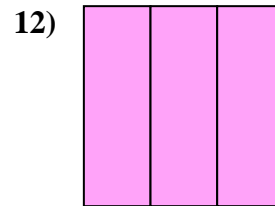
- A. four-fourths
- B. three-fourths
- C. two-quarters



- A. three-thirds
- B. two-halves
- C. four-fourths



- A. one-half
- B. three-fourths
- C. one-fourth



- A. three-thirds
- B. two-halves
- C. one-quarter

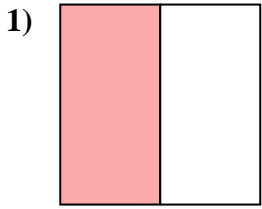
**Answers**

- 1.   **A**
- 2.   **C**
- 3.   **B**
- 4.   **B**
- 5.   **B**
- 6.   **B**
- 7.   **C**
- 8.   **C**
- 9.   **B**
- 10.   **A**
- 11.   **A**
- 12.   **A**

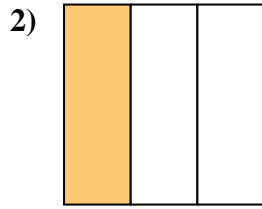


Determine which letter best describes the shaded portion.

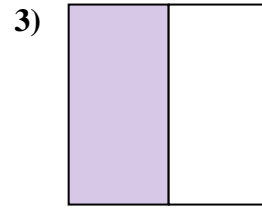
**Answers**



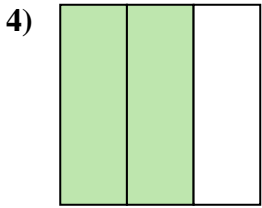
- A. one-half
- B. one-quarter
- C. two-quarters



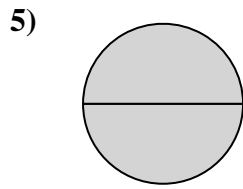
- A. one-fourth
- B. one-third
- C. two-halves



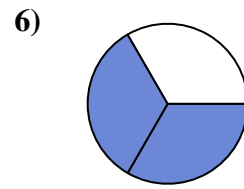
- A. one-half
- B. two-quarters
- C. three-fourths



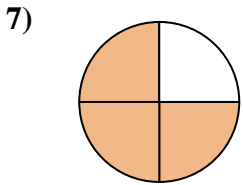
- A. three-fourths
- B. one-quarter
- C. two-thirds



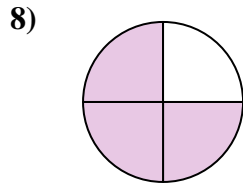
- A. two-quarters
- B. two-halves
- C. one-half



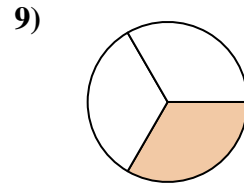
- A. two-thirds
- B. two-halves
- C. one-quarter



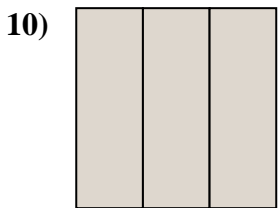
- A. four-fourths
- B. one-quarter
- C. three-fourths



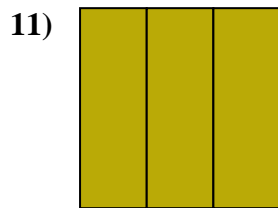
- A. three-quarters
- B. two-halves
- C. four-quarters



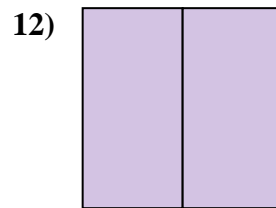
- A. one-third
- B. two-fourths
- C. four-fourths



- A. one-quarter
- B. three-thirds
- C. two-quarters



- A. three-thirds
- B. three-quarters
- C. one-quarter

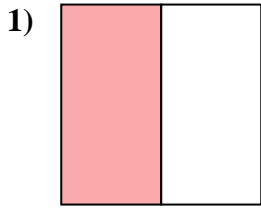


- A. three-quarters
- B. two-fourths
- C. two-halves

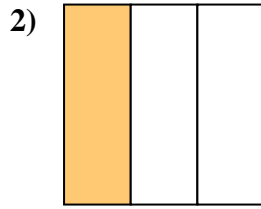
- 1. \_\_\_\_\_
- 2. \_\_\_\_\_
- 3. \_\_\_\_\_
- 4. \_\_\_\_\_
- 5. \_\_\_\_\_
- 6. \_\_\_\_\_
- 7. \_\_\_\_\_
- 8. \_\_\_\_\_
- 9. \_\_\_\_\_
- 10. \_\_\_\_\_
- 11. \_\_\_\_\_
- 12. \_\_\_\_\_



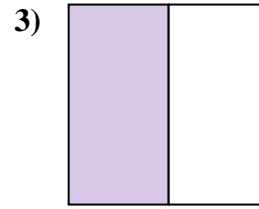
Determine which letter best describes the shaded portion.



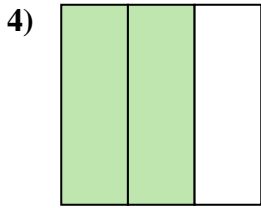
- A. one-half
- B. one-quarter
- C. two-quarters



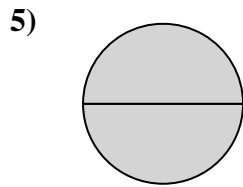
- A. one-fourth
- B. one-third
- C. two-halves



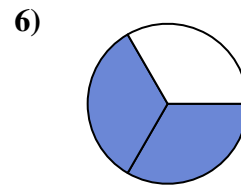
- A. one-half
- B. two-quarters
- C. three-fourths



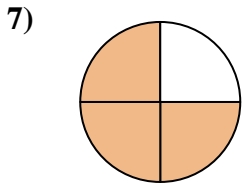
- A. three-fourths
- B. one-quarter
- C. two-thirds



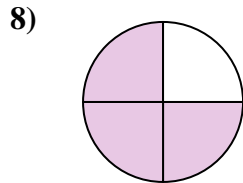
- A. two-quarters
- B. two-halves
- C. one-half



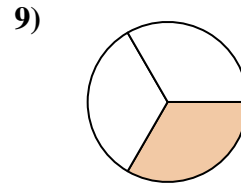
- A. two-thirds
- B. two-halves
- C. one-quarter



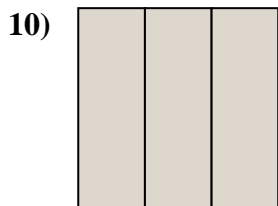
- A. four-fourths
- B. one-quarter
- C. three-fourths



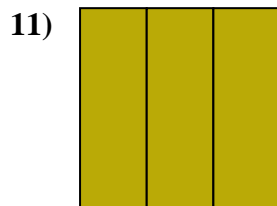
- A. three-quarters
- B. two-halves
- C. four-quarters



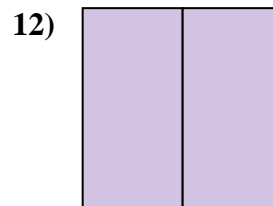
- A. one-third
- B. two-fourths
- C. four-fourths



- A. one-quarter
- B. three-thirds
- C. two-quarters



- A. three-thirds
- B. three-quarters
- C. one-quarter



- A. three-quarters
- B. two-fourths
- C. two-halves

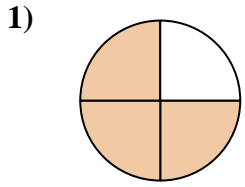
**Answers**

- 1.   **A**
- 2.   **B**
- 3.   **A**
- 4.   **C**
- 5.   **B**
- 6.   **A**
- 7.   **C**
- 8.   **A**
- 9.   **A**
- 10.   **B**
- 11.   **A**
- 12.   **C**

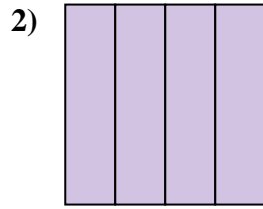


Determine which letter best describes the shaded portion.

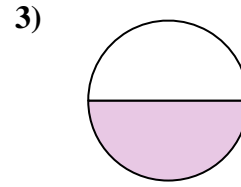
**Answers**



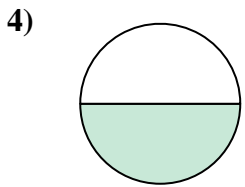
- A. four-fourths
- B. two-halves
- C. three-fourths



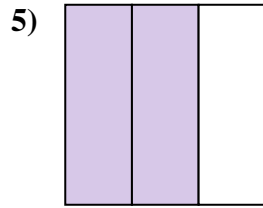
- A. one-half
- B. four-fourths
- C. one-quarter



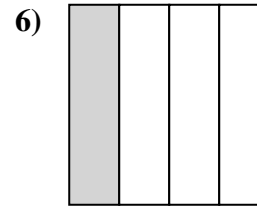
- A. one-half
- B. two-halves
- C. three-quarters



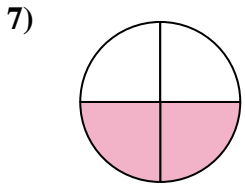
- A. one-half
- B. two-fourths
- C. two-halves



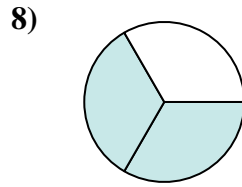
- A. two-quarters
- B. one-fourth
- C. two-thirds



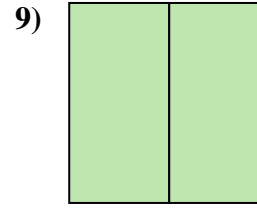
- A. four-quarters
- B. two-halves
- C. one-quarter



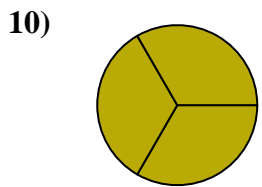
- A. four-fourths
- B. one-quarter
- C. two-quarters



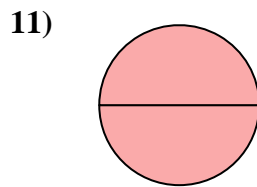
- A. one-half
- B. two-halves
- C. two-thirds



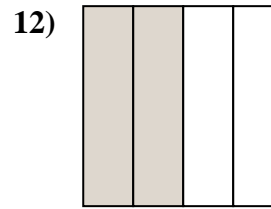
- A. two-halves
- B. one-half
- C. two-quarters



- A. three-thirds
- B. three-quarters
- C. two-halves



- A. two-fourths
- B. one-quarter
- C. two-halves

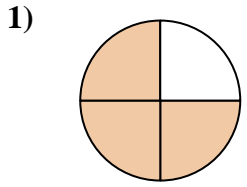


- A. one-quarter
- B. two-quarters
- C. one-half

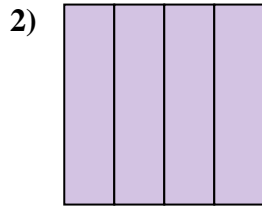
- 1. \_\_\_\_\_
- 2. \_\_\_\_\_
- 3. \_\_\_\_\_
- 4. \_\_\_\_\_
- 5. \_\_\_\_\_
- 6. \_\_\_\_\_
- 7. \_\_\_\_\_
- 8. \_\_\_\_\_
- 9. \_\_\_\_\_
- 10. \_\_\_\_\_
- 11. \_\_\_\_\_
- 12. \_\_\_\_\_



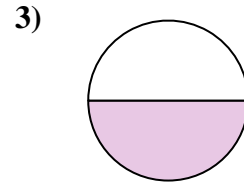
Determine which letter best describes the shaded portion.



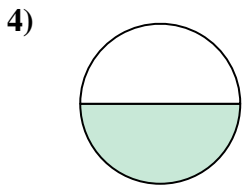
- A. four-fourths
- B. two-halves
- C. three-fourths



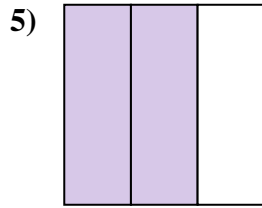
- A. one-half
- B. four-fourths
- C. one-quarter



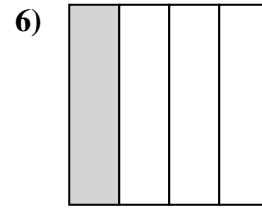
- A. one-half
- B. two-halves
- C. three-quarters



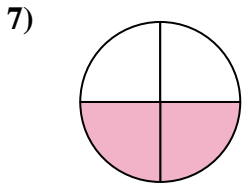
- A. one-half
- B. two-fourths
- C. two-halves



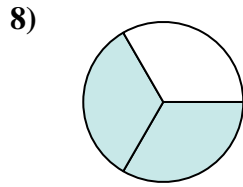
- A. two-quarters
- B. one-fourth
- C. two-thirds



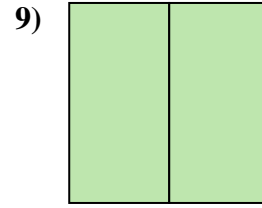
- A. four-quarters
- B. two-halves
- C. one-quarter



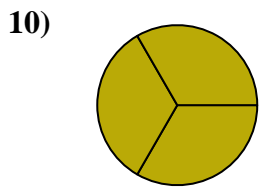
- A. four-fourths
- B. one-quarter
- C. two-quarters



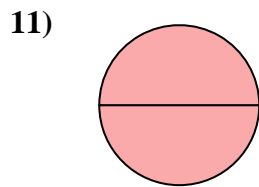
- A. one-half
- B. two-halves
- C. two-thirds



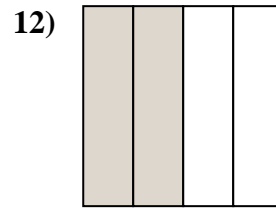
- A. two-halves
- B. one-half
- C. two-quarters



- A. three-thirds
- B. three-quarters
- C. two-halves



- A. two-fourths
- B. one-quarter
- C. two-halves



- A. one-quarter
- B. two-quarters
- C. one-half

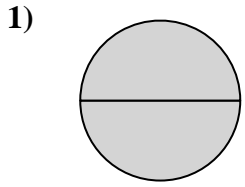
**Answers**

- 1.     **C**
- 2.     **B**
- 3.     **A**
- 4.     **A**
- 5.     **C**
- 6.     **C**
- 7.     **C**
- 8.     **C**
- 9.     **A**
- 10.     **A**
- 11.     **C**
- 12.     **B**

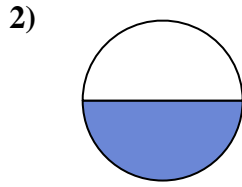


Determine which letter best describes the shaded portion.

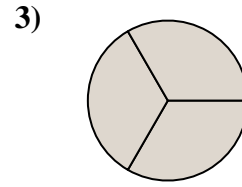
**Answers**



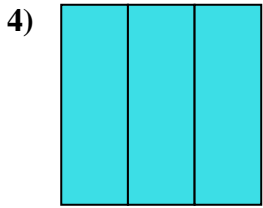
- A. two-halves
- B. one-fourth
- C. four-fourths



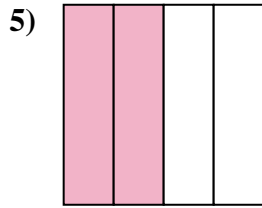
- A. two-halves
- B. one-half
- C. two-fourths



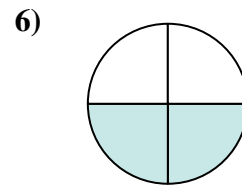
- A. two-fourths
- B. three-thirds
- C. one-half



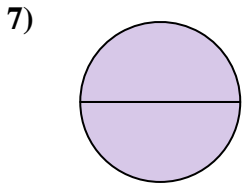
- A. three-thirds
- B. four-quarters
- C. one-half



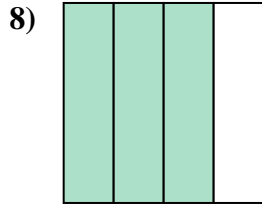
- A. three-quarters
- B. two-halves
- C. two-quarters



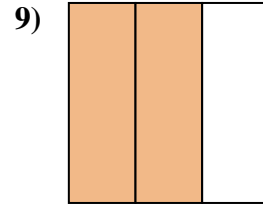
- A. two-halves
- B. three-fourths
- C. two-quarters



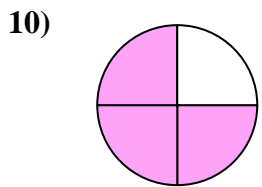
- A. three-fourths
- B. two-quarters
- C. two-halves



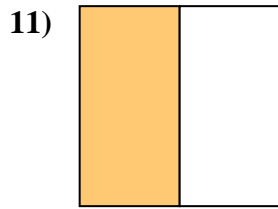
- A. four-fourths
- B. two-halves
- C. three-quarters



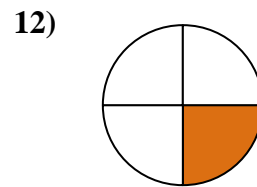
- A. two-thirds
- B. three-quarters
- C. one-fourth



- A. two-halves
- B. three-quarters
- C. one-quarter



- A. two-halves
- B. one-half
- C. three-fourths

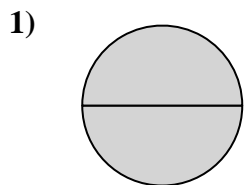


- A. two-halves
- B. one-half
- C. one-fourth

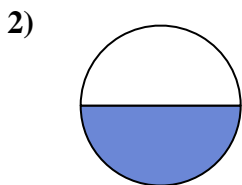
1. \_\_\_\_\_
2. \_\_\_\_\_
3. \_\_\_\_\_
4. \_\_\_\_\_
5. \_\_\_\_\_
6. \_\_\_\_\_
7. \_\_\_\_\_
8. \_\_\_\_\_
9. \_\_\_\_\_
10. \_\_\_\_\_
11. \_\_\_\_\_
12. \_\_\_\_\_



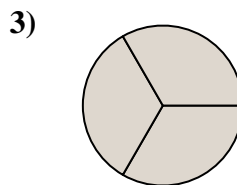
Determine which letter best describes the shaded portion.



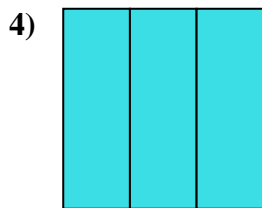
- A. two-halves
- B. one-fourth
- C. four-fourths



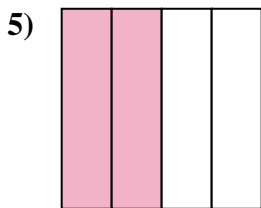
- A. two-halves
- B. one-half
- C. two-fourths



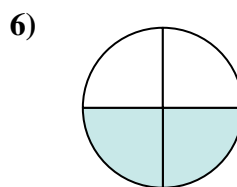
- A. two-fourths
- B. three-thirds
- C. one-half



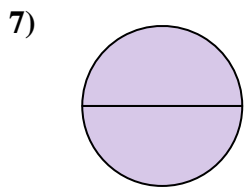
- A. three-thirds
- B. four-quarters
- C. one-half



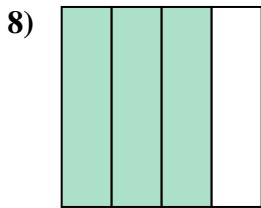
- A. three-quarters
- B. two-halves
- C. two-quarters



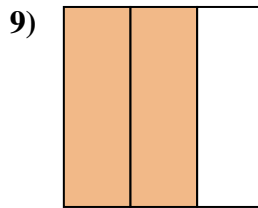
- A. two-halves
- B. three-fourths
- C. two-quarters



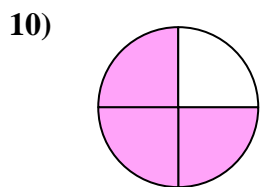
- A. three-fourths
- B. two-quarters
- C. two-halves



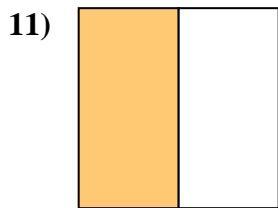
- A. four-fourths
- B. two-halves
- C. three-quarters



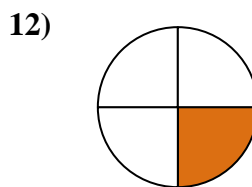
- A. two-thirds
- B. three-quarters
- C. one-fourth



- A. two-halves
- B. three-quarters
- C. one-quarter



- A. two-halves
- B. one-half
- C. three-fourths



- A. two-halves
- B. one-half
- C. one-fourth

**Answers**

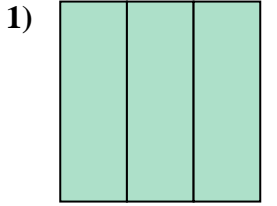
- 1.   **A**
- 2.   **B**
- 3.   **B**
- 4.   **A**
- 5.   **C**
- 6.   **C**
- 7.   **C**
- 8.   **C**
- 9.   **A**
- 10.   **B**
- 11.   **B**
- 12.   **C**



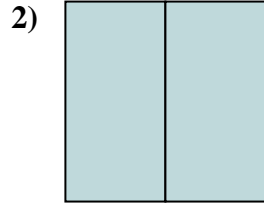


Determine which letter best describes the shaded portion.

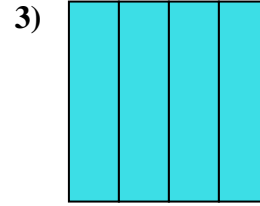
**Answers**



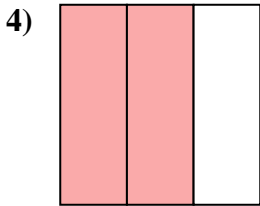
- A. three-quarters
- B. three-thirds
- C. two-halves



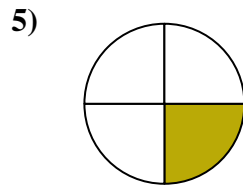
- A. three-fourths
- B. two-halves
- C. two-fourths



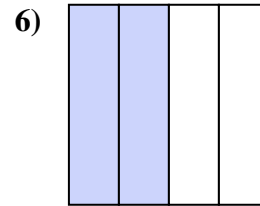
- A. four-fourths
- B. two-quarters
- C. two-halves



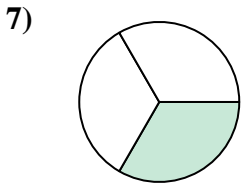
- A. two-thirds
- B. four-quarters
- C. one-fourth



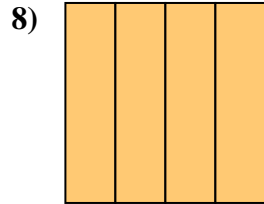
- A. two-fourths
- B. one-quarter
- C. two-halves



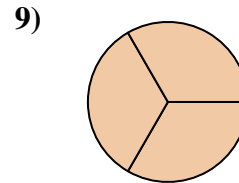
- A. one-quarter
- B. one-half
- C. two-fourths



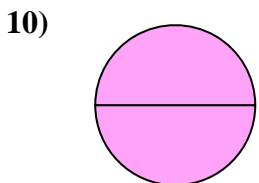
- A. one-quarter
- B. one-third
- C. four-fourths



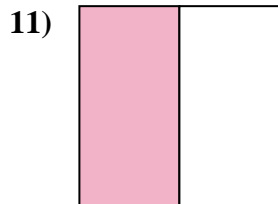
- A. four-quarters
- B. one-half
- C. two-halves



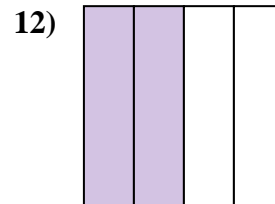
- A. three-thirds
- B. one-half
- C. four-quarters



- A. four-quarters
- B. two-halves
- C. three-fourths



- A. one-half
- B. two-halves
- C. one-fourth

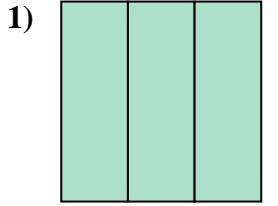


- A. two-quarters
- B. two-halves
- C. one-half

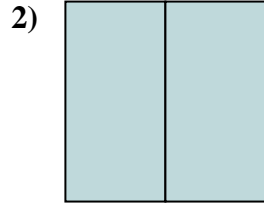
- 1. \_\_\_\_\_
- 2. \_\_\_\_\_
- 3. \_\_\_\_\_
- 4. \_\_\_\_\_
- 5. \_\_\_\_\_
- 6. \_\_\_\_\_
- 7. \_\_\_\_\_
- 8. \_\_\_\_\_
- 9. \_\_\_\_\_
- 10. \_\_\_\_\_
- 11. \_\_\_\_\_
- 12. \_\_\_\_\_



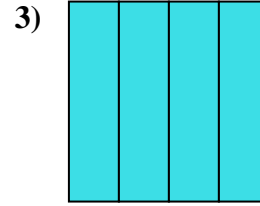
Determine which letter best describes the shaded portion.



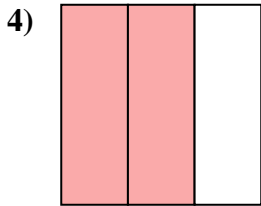
- A. three-quarters
- B. three-thirds
- C. two-halves



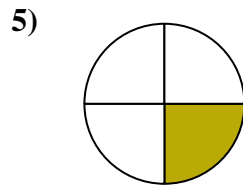
- A. three-fourths
- B. two-halves
- C. two-fourths



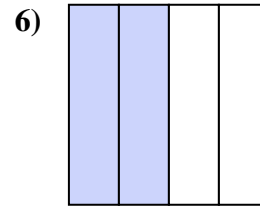
- A. four-fourths
- B. two-quarters
- C. two-halves



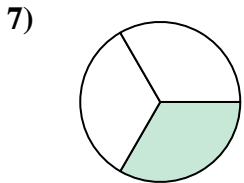
- A. two-thirds
- B. four-quarters
- C. one-fourth



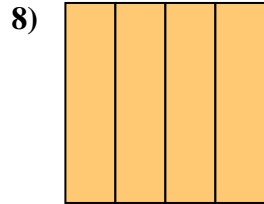
- A. two-fourths
- B. one-quarter
- C. two-halves



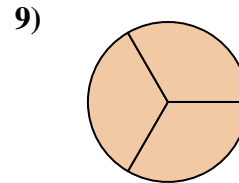
- A. one-quarter
- B. one-half
- C. two-fourths



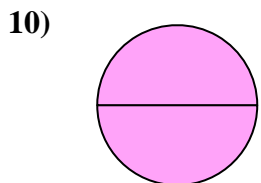
- A. one-quarter
- B. one-third
- C. four-fourths



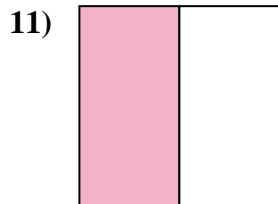
- A. four-quarters
- B. one-half
- C. two-halves



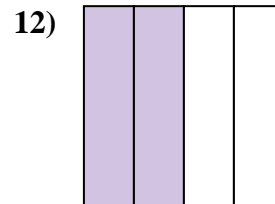
- A. three-thirds
- B. one-half
- C. four-quarters



- A. four-quarters
- B. two-halves
- C. three-fourths



- A. one-half
- B. two-halves
- C. one-fourth



- A. two-quarters
- B. two-halves
- C. one-half

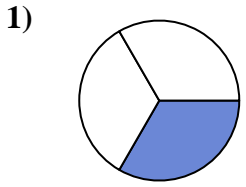
**Answers**

- 1.     **B**
- 2.     **B**
- 3.     **A**
- 4.     **A**
- 5.     **B**
- 6.     **C**
- 7.     **B**
- 8.     **A**
- 9.     **A**
- 10.     **B**
- 11.     **A**
- 12.     **A**

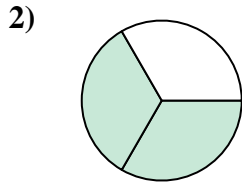


Determine which letter best describes the shaded portion.

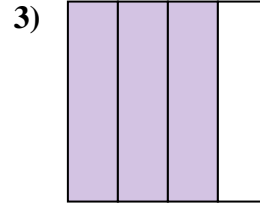
**Answers**



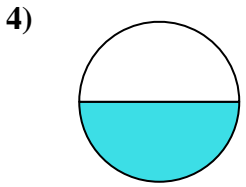
- A. four-quarters
- B. one-quarter
- C. one-third



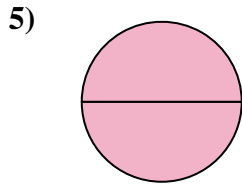
- A. two-thirds
- B. one-half
- C. one-quarter



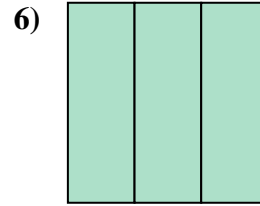
- A. four-fourths
- B. one-half
- C. three-fourths



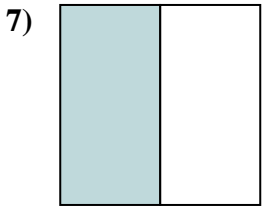
- A. one-half
- B. four-quarters
- C. three-fourths



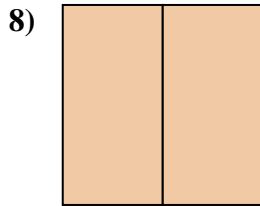
- A. one-half
- B. one-fourth
- C. two-halves



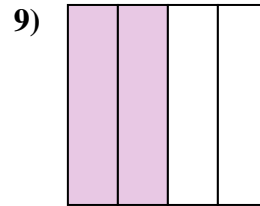
- A. three-fourths
- B. three-thirds
- C. two-halves



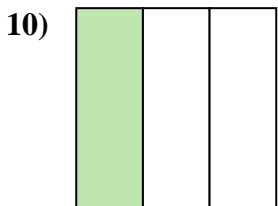
- A. two-fourths
- B. two-halves
- C. one-half



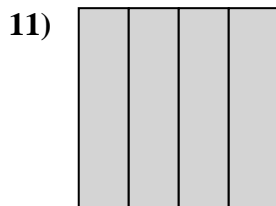
- A. one-fourth
- B. two-halves
- C. three-fourths



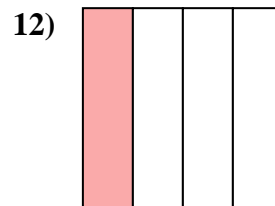
- A. four-fourths
- B. one-half
- C. two-quarters



- A. one-third
- B. two-halves
- C. one-fourth



- A. three-quarters
- B. four-fourths
- C. two-halves

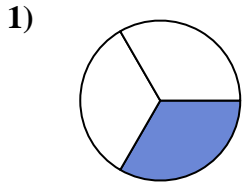


- A. one-quarter
- B. three-quarters
- C. two-halves

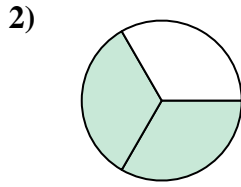
- 1. \_\_\_\_\_
- 2. \_\_\_\_\_
- 3. \_\_\_\_\_
- 4. \_\_\_\_\_
- 5. \_\_\_\_\_
- 6. \_\_\_\_\_
- 7. \_\_\_\_\_
- 8. \_\_\_\_\_
- 9. \_\_\_\_\_
- 10. \_\_\_\_\_
- 11. \_\_\_\_\_
- 12. \_\_\_\_\_



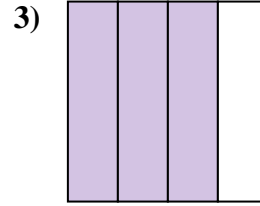
Determine which letter best describes the shaded portion.



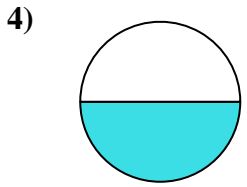
- A. four-quarters
- B. one-quarter
- C. one-third



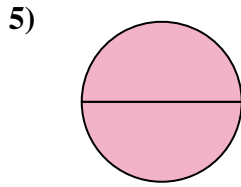
- A. two-thirds
- B. one-half
- C. one-quarter



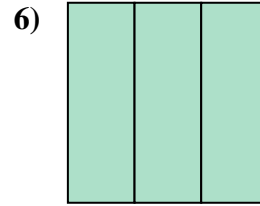
- A. four-fourths
- B. one-half
- C. three-fourths



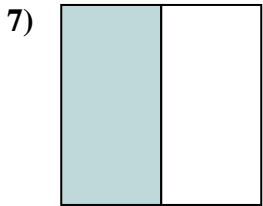
- A. one-half
- B. four-quarters
- C. three-fourths



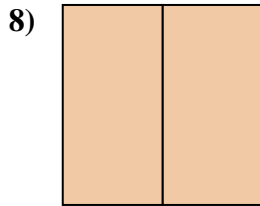
- A. one-half
- B. one-fourth
- C. two-halves



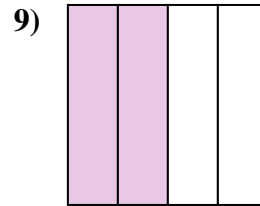
- A. three-fourths
- B. three-thirds
- C. two-halves



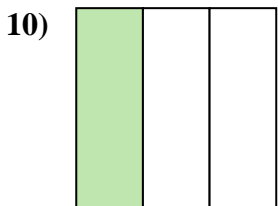
- A. two-fourths
- B. two-halves
- C. one-half



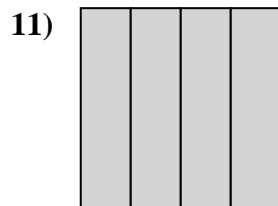
- A. one-fourth
- B. two-halves
- C. three-fourths



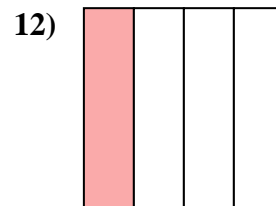
- A. four-fourths
- B. one-half
- C. two-quarters



- A. one-third
- B. two-halves
- C. one-fourth



- A. three-quarters
- B. four-fourths
- C. two-halves



- A. one-quarter
- B. three-quarters
- C. two-halves

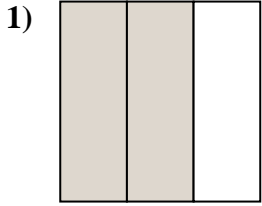
**Answers**

- 1.     **C**
- 2.     **A**
- 3.     **C**
- 4.     **A**
- 5.     **C**
- 6.     **B**
- 7.     **C**
- 8.     **B**
- 9.     **C**
- 10.     **A**
- 11.     **B**
- 12.     **A**

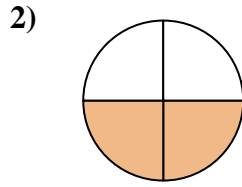


Determine which letter best describes the shaded portion.

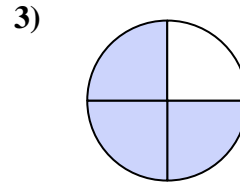
**Answers**



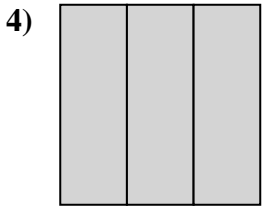
- A. two-thirds
- B. two-fourths
- C. two-halves



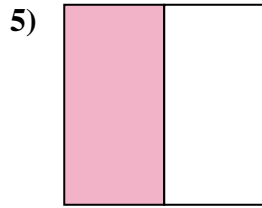
- A. four-fourths
- B. two-fourths
- C. one-half



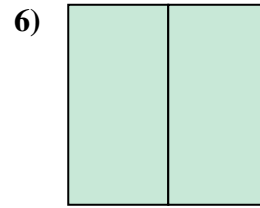
- A. three-fourths
- B. four-quarters
- C. two-halves



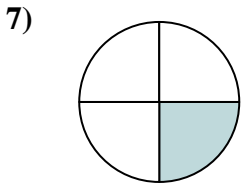
- A. three-thirds
- B. one-fourth
- C. two-halves



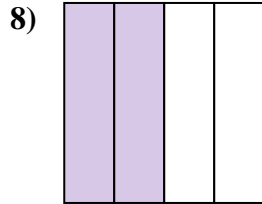
- A. one-half
- B. two-halves
- C. two-quarters



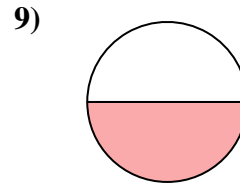
- A. one-fourth
- B. two-fourths
- C. two-halves



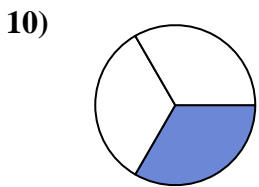
- A. two-halves
- B. three-fourths
- C. one-fourth



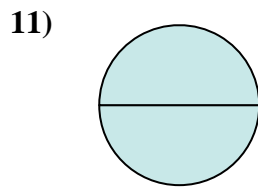
- A. two-fourths
- B. three-fourths
- C. four-fourths



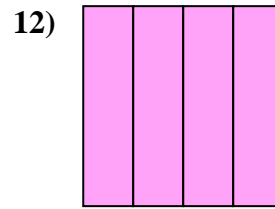
- A. two-halves
- B. four-fourths
- C. one-half



- A. two-halves
- B. one-third
- C. two-fourths



- A. two-halves
- B. three-fourths
- C. four-quarters

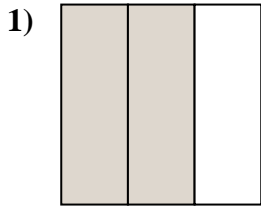


- A. one-quarter
- B. two-quarters
- C. four-fourths

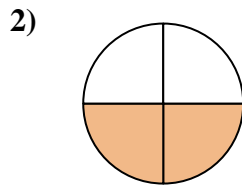
- 1. \_\_\_\_\_
- 2. \_\_\_\_\_
- 3. \_\_\_\_\_
- 4. \_\_\_\_\_
- 5. \_\_\_\_\_
- 6. \_\_\_\_\_
- 7. \_\_\_\_\_
- 8. \_\_\_\_\_
- 9. \_\_\_\_\_
- 10. \_\_\_\_\_
- 11. \_\_\_\_\_
- 12. \_\_\_\_\_



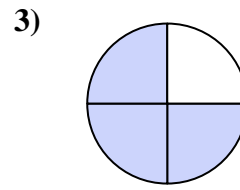
Determine which letter best describes the shaded portion.



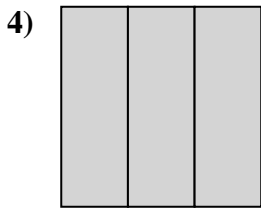
- A. two-thirds
- B. two-fourths
- C. two-halves



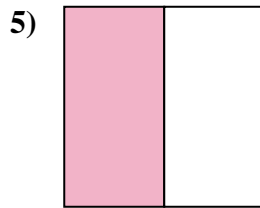
- A. four-fourths
- B. two-fourths
- C. one-half



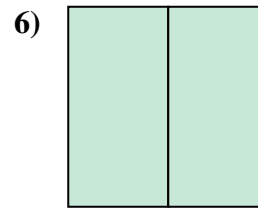
- A. three-fourths
- B. four-quarters
- C. two-halves



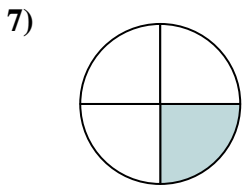
- A. three-thirds
- B. one-fourth
- C. two-halves



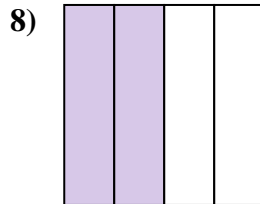
- A. one-half
- B. two-halves
- C. two-quarters



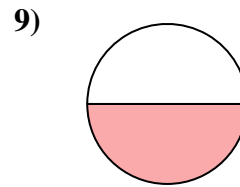
- A. one-fourth
- B. two-fourths
- C. two-halves



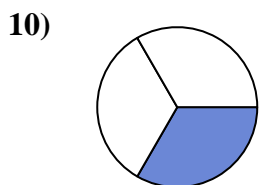
- A. two-halves
- B. three-fourths
- C. one-fourth



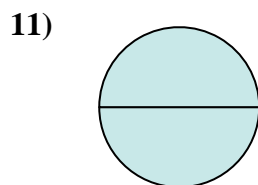
- A. two-fourths
- B. three-fourths
- C. four-fourths



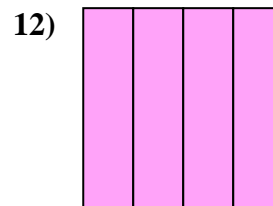
- A. two-halves
- B. four-fourths
- C. one-half



- A. two-halves
- B. one-third
- C. two-fourths



- A. two-halves
- B. three-fourths
- C. four-quarters



- A. one-quarter
- B. two-quarters
- C. four-fourths

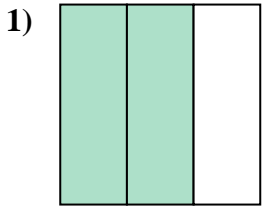
**Answers**

- 1.   **A**
- 2.   **B**
- 3.   **A**
- 4.   **A**
- 5.   **A**
- 6.   **C**
- 7.   **C**
- 8.   **A**
- 9.   **C**
- 10.   **B**
- 11.   **A**
- 12.   **C**

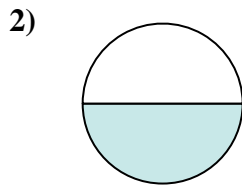


Determine which letter best describes the shaded portion.

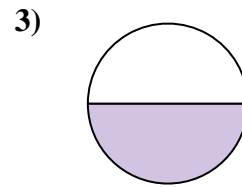
**Answers**



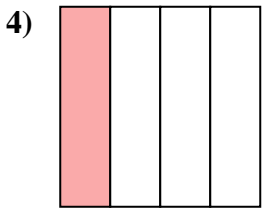
- A. two-halves
- B. two-thirds
- C. one-quarter



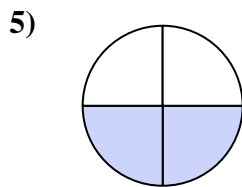
- A. one-fourth
- B. two-quarters
- C. one-half



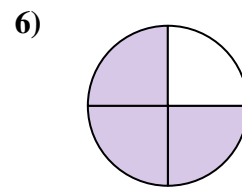
- A. two-fourths
- B. one-half
- C. two-halves



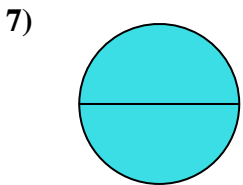
- A. one-half
- B. four-quarters
- C. one-quarter



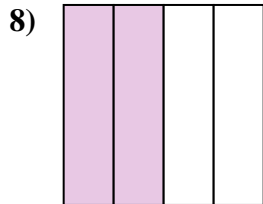
- A. three-quarters
- B. two-quarters
- C. two-halves



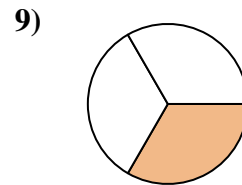
- A. two-quarters
- B. one-quarter
- C. three-quarters



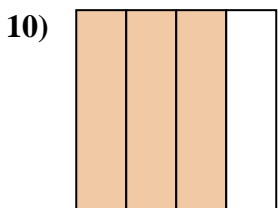
- A. two-fourths
- B. two-halves
- C. one-quarter



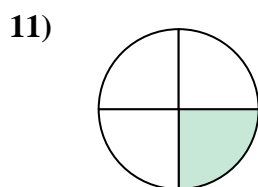
- A. three-quarters
- B. two-quarters
- C. two-halves



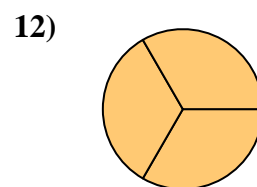
- A. one-half
- B. one-third
- C. four-quarters



- A. one-half
- B. one-quarter
- C. three-quarters



- A. one-half
- B. four-fourths
- C. one-quarter

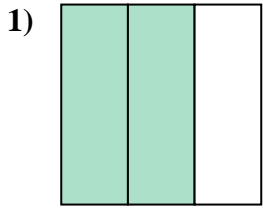


- A. three-thirds
- B. two-halves
- C. one-fourth

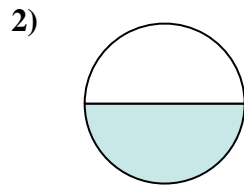
- 1. \_\_\_\_\_
- 2. \_\_\_\_\_
- 3. \_\_\_\_\_
- 4. \_\_\_\_\_
- 5. \_\_\_\_\_
- 6. \_\_\_\_\_
- 7. \_\_\_\_\_
- 8. \_\_\_\_\_
- 9. \_\_\_\_\_
- 10. \_\_\_\_\_
- 11. \_\_\_\_\_
- 12. \_\_\_\_\_



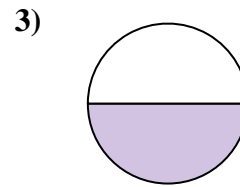
Determine which letter best describes the shaded portion.



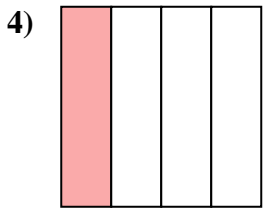
- A. two-halves
- B. two-thirds
- C. one-quarter



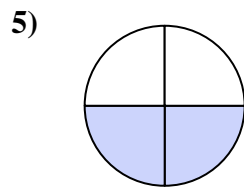
- A. one-fourth
- B. two-quarters
- C. one-half



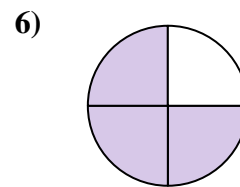
- A. two-fourths
- B. one-half
- C. two-halves



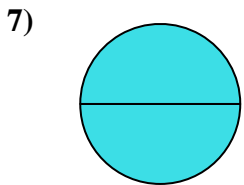
- A. one-half
- B. four-quarters
- C. one-quarter



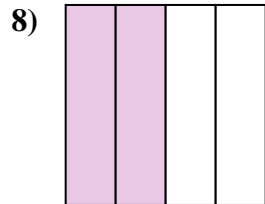
- A. three-quarters
- B. two-quarters
- C. two-halves



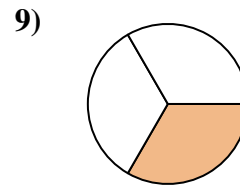
- A. two-quarters
- B. one-quarter
- C. three-quarters



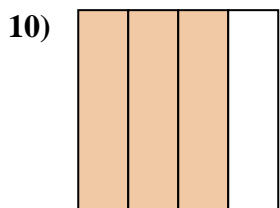
- A. two-fourths
- B. two-halves
- C. one-quarter



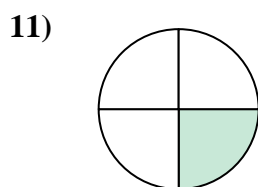
- A. three-quarters
- B. two-quarters
- C. two-halves



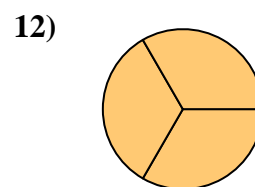
- A. one-half
- B. one-third
- C. four-quarters



- A. one-half
- B. one-quarter
- C. three-quarters



- A. one-half
- B. four-fourths
- C. one-quarter



- A. three-thirds
- B. two-halves
- C. one-fourth

**Answers**

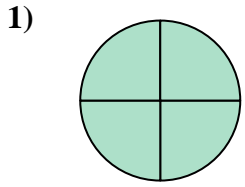
- 1.   **B**
- 2.   **C**
- 3.   **B**
- 4.   **C**
- 5.   **B**
- 6.   **C**
- 7.   **B**
- 8.   **B**
- 9.   **B**
- 10.   **C**
- 11.   **C**
- 12.   **A**



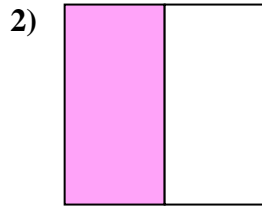


Determine which letter best describes the shaded portion.

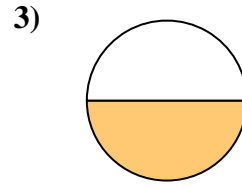
**Answers**



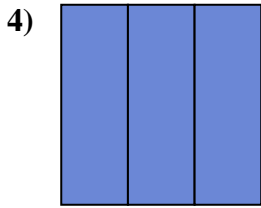
- A. one-fourth
- B. three-fourths
- C. four-fourths



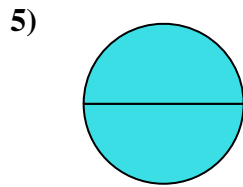
- A. three-quarters
- B. one-quarter
- C. one-half



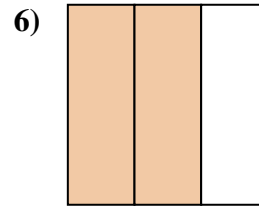
- A. two-quarters
- B. three-quarters
- C. one-half



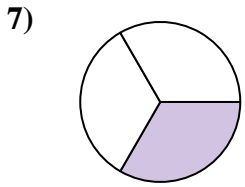
- A. two-halves
- B. one-half
- C. three-thirds



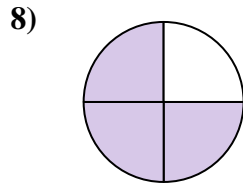
- A. two-halves
- B. one-quarter
- C. two-fourths



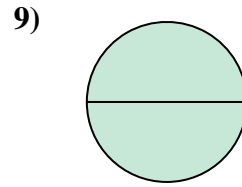
- A. two-thirds
- B. two-halves
- C. one-fourth



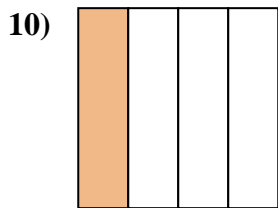
- A. four-fourths
- B. two-halves
- C. one-third



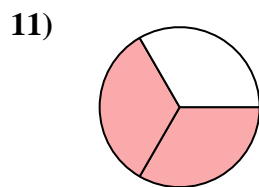
- A. three-quarters
- B. four-quarters
- C. two-halves



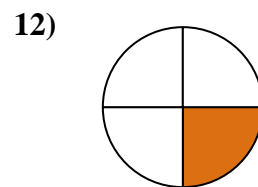
- A. two-quarters
- B. four-fourths
- C. two-halves



- A. two-halves
- B. one-fourth
- C. two-quarters



- A. one-fourth
- B. two-thirds
- C. one-half



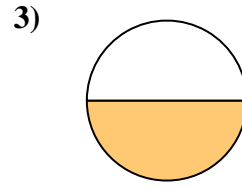
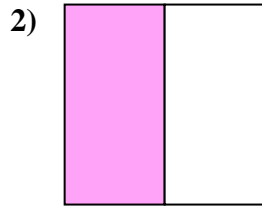
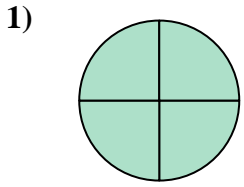
- A. one-fourth
- B. three-quarters
- C. two-halves

- 1. \_\_\_\_\_
- 2. \_\_\_\_\_
- 3. \_\_\_\_\_
- 4. \_\_\_\_\_
- 5. \_\_\_\_\_
- 6. \_\_\_\_\_
- 7. \_\_\_\_\_
- 8. \_\_\_\_\_
- 9. \_\_\_\_\_
- 10. \_\_\_\_\_
- 11. \_\_\_\_\_
- 12. \_\_\_\_\_



Determine which letter best describes the shaded portion.

**Answers**



- A. one-fourth
- B. three-fourths
- C. four-fourths

- A. three-quarters
- B. one-quarter
- C. one-half

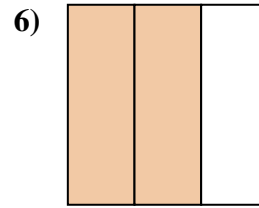
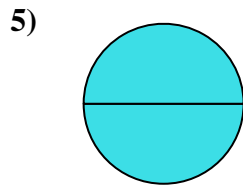
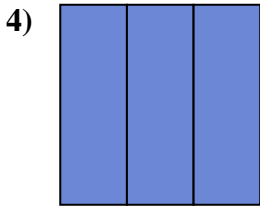
- A. two-quarters
- B. three-quarters
- C. one-half

1.     **C**    

2.     **C**    

3.     **C**    

4.     **C**    



- A. two-halves
- B. one-half
- C. three-thirds

- A. two-halves
- B. one-quarter
- C. two-fourths

- A. two-thirds
- B. two-halves
- C. one-fourth

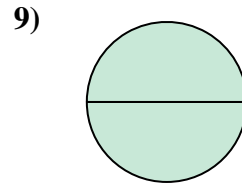
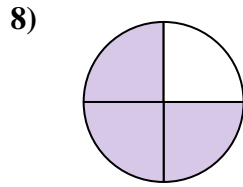
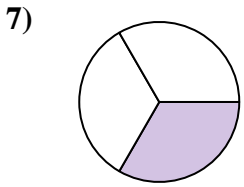
5.     **A**    

6.     **A**    

7.     **C**    

8.     **A**    

9.     **C**    



- A. four-fourths
- B. two-halves
- C. one-third

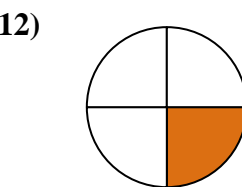
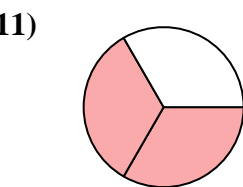
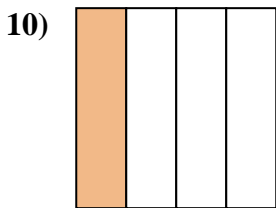
- A. three-quarters
- B. four-quarters
- C. two-halves

- A. two-quarters
- B. four-fourths
- C. two-halves

10.     **B**    

11.     **B**    

12.     **A**    



- A. two-halves
- B. one-fourth
- C. two-quarters


- A. one-fourth
- B. two-thirds
- C. one-half

- A. one-fourth
- B. three-quarters
- C. two-halves

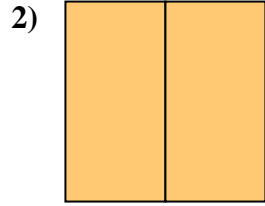


Determine which letter best describes the shaded portion.

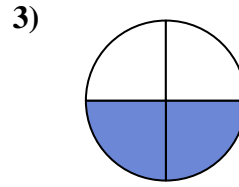
**Answers**



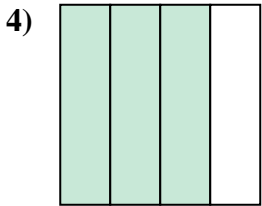
- A. two-fourths
- B. one-half
- C. two-halves



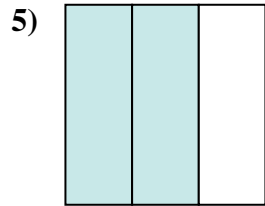
- A. two-halves
- B. four-fourths
- C. three-quarters



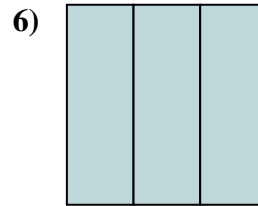
- A. one-quarter
- B. three-fourths
- C. two-quarters



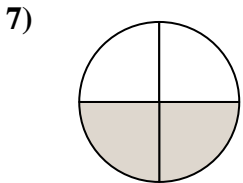
- A. one-fourth
- B. three-quarters
- C. two-fourths



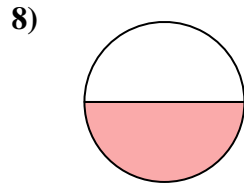
- A. two-thirds
- B. two-halves
- C. three-fourths



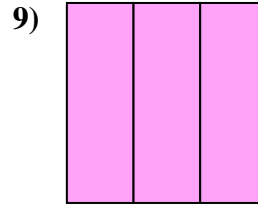
- A. two-halves
- B. one-half
- C. three-thirds



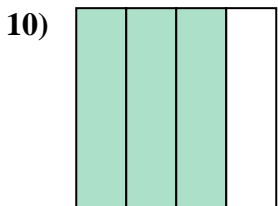
- A. four-quarters
- B. three-fourths
- C. two-quarters



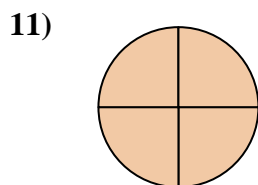
- A. four-fourths
- B. two-halves
- C. one-half



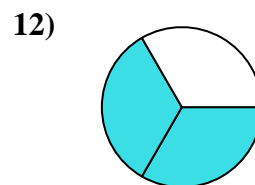
- A. one-half
- B. three-thirds
- C. four-quarters



- A. three-quarters
- B. two-halves
- C. two-fourths



- A. four-fourths
- B. one-fourth
- C. two-fourths

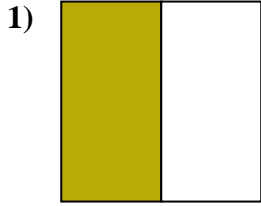


- A. three-fourths
- B. two-thirds
- C. two-fourths

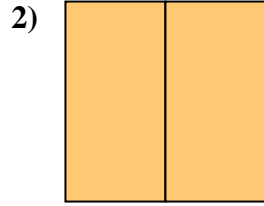
- 1. \_\_\_\_\_
- 2. \_\_\_\_\_
- 3. \_\_\_\_\_
- 4. \_\_\_\_\_
- 5. \_\_\_\_\_
- 6. \_\_\_\_\_
- 7. \_\_\_\_\_
- 8. \_\_\_\_\_
- 9. \_\_\_\_\_
- 10. \_\_\_\_\_
- 11. \_\_\_\_\_
- 12. \_\_\_\_\_



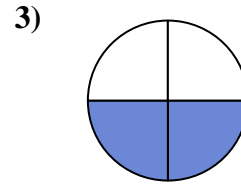
Determine which letter best describes the shaded portion.



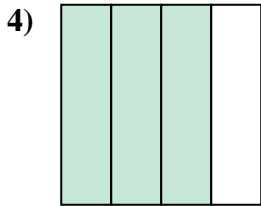
- A. two-fourths
- B. one-half
- C. two-halves



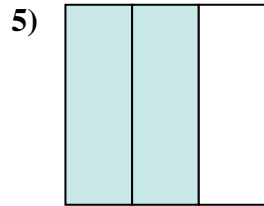
- A. two-halves
- B. four-fourths
- C. three-quarters



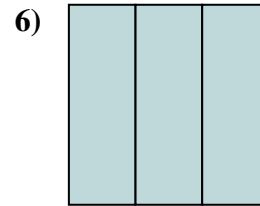
- A. one-quarter
- B. three-fourths
- C. two-quarters



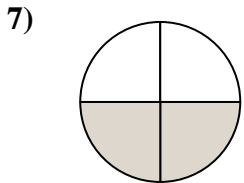
- A. one-fourth
- B. three-quarters
- C. two-fourths



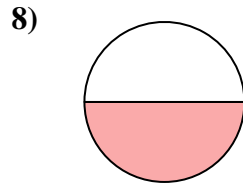
- A. two-thirds
- B. two-halves
- C. three-fourths



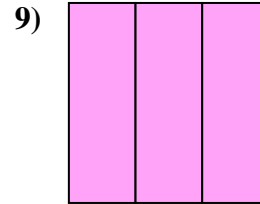
- A. two-halves
- B. one-half
- C. three-thirds



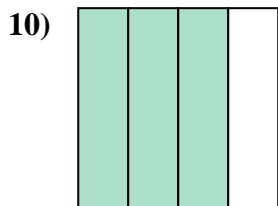
- A. four-quarters
- B. three-fourths
- C. two-quarters



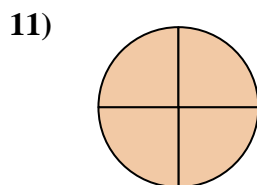
- A. four-fourths
- B. two-halves
- C. one-half



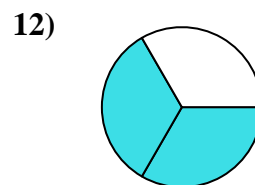
- A. one-half
- B. three-thirds
- C. four-quarters



- A. three-quarters
- B. two-halves
- C. two-fourths



- A. four-fourths
- B. one-fourth
- C. two-fourths



- A. three-fourths
- B. two-thirds
- C. two-fourths

**Answers**

- 1.     **B**
- 2.     **A**
- 3.     **C**
- 4.     **B**
- 5.     **A**
- 6.     **C**
- 7.     **C**
- 8.     **C**
- 9.     **B**
- 10.     **A**
- 11.     **A**
- 12.     **B**